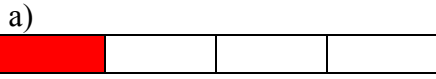


Find fractions of shapes

**Section 1**

Write in what fraction is shaded.



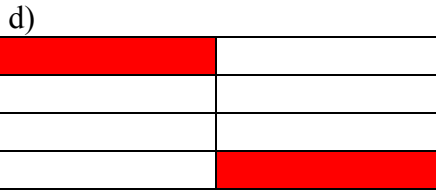
—




—



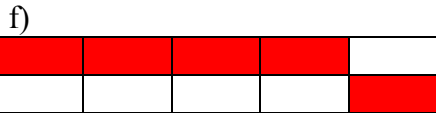
—



—



—



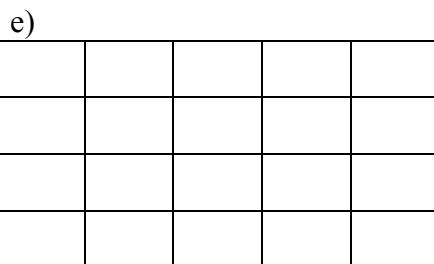
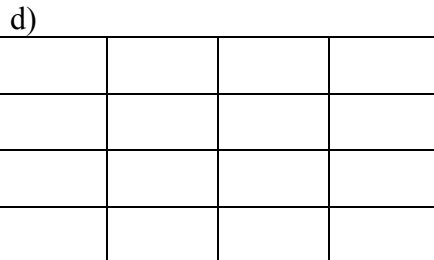
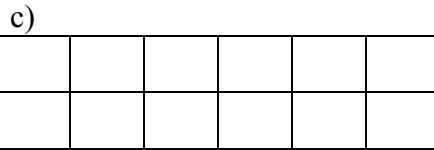
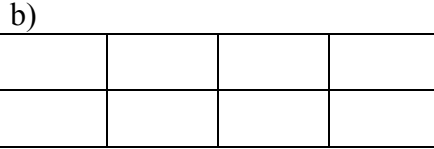
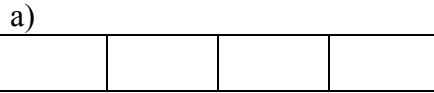
—



— or —

**Section 2**

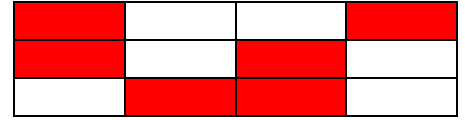
Shade in  $\frac{3}{4}$  of each shape.



**Extension – True or false?**

Circle the correct answer


*Half of the shape is shaded*



True

False


*$\frac{1}{4}$  of the shape is shaded*



True

False

*It is impossible to shade  $\frac{3}{6}$  of the shape below*



True

False