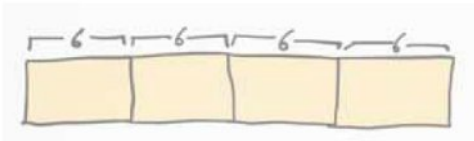
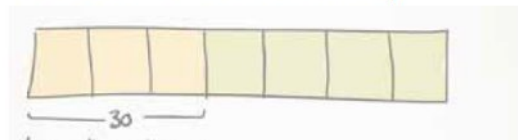


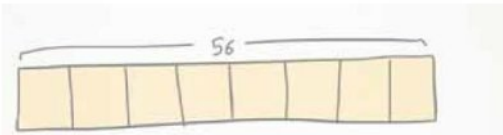
Gingerbread men come in packets of 6. Paul buys 4 packets. How many gingerbread men does he have?



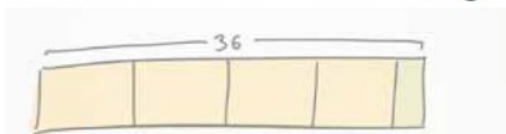
After John bought a magazine subscription costing £30 for the year from his birthday money, he had $\frac{4}{7}$ left. How much did John receive for his birthday?



Lucy has 56 tulips. She wants to share them equally into 8 vases. How many tulips should be in each vase?



Farmer Oats has 4 bags of sweetcorn and 4 extra sweetcorn. Each bag holds the same amount. Farmer Oats has 36 sweetcorn altogether. How many sweetcorn are in each bag?



Miss Wong, the teacher, has four cards. On each card is a number:

59 996

59 943

60 026

62 312

She gives one card to each pupil. The pupils look at their card and say a clue.

Anna says, 'My number is 60 000 to the nearest 10 thousand.'

Bashir says, 'My number has exactly 600 hundreds in it.'

Charis says, 'My number is 59900 to the nearest hundred.'

David says, 'My number is 60 000 to the nearest 10.'

Can you work out which card each pupil had? Explain your choices.

