

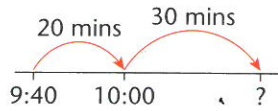
I can solve time problems by finding a time difference or by finding a start or end time.

**Examples**

A lesson starts at 9:40.

It lasts 50 minutes.

When does it finish?

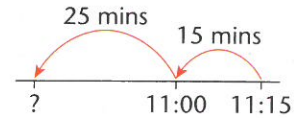


Answer 10:30

A lesson lasts 40 minutes.

It finishes at 11:15.

When does it start?




Answer 10:35


**A**

- 1 A television programme begins at 8:10 and finishes at 9:00. How long is the programme?
- 2 A netball match starts at 3:15 and finishes at 3:55. How long is the match?
- 3 Jose gets into the swimming pool at 1:40. He gets out at 2:30. How long is he in the pool?
- 4 A washing machine is switched on at 7:35. The wash finishes at 8:20. How long has it taken?
- 5 Nieve puts the chips in the oven at 4:45. They are ready at 5:15. How long have they taken?
- 6 Dance Club starts at 3:30. It finishes at 4:25. How long does it last?
- 7 Amir's watch is 20 minutes slow. It shows the time as 9:05. What is the real time?

**B**

- 1 Dean's bike ride takes 50 minutes. He arrives back at home at 12:15. When did he set off?
  - 2 The music lesson lasts 40 minutes. It starts at 1:40. When does it finish?
- 
- 3 Maria knows a clock is 15 minutes fast. The clock shows the time as 6:10. What is the real time?
  - 4 A football match kicks off at 7:45. The first half takes 45 minutes. When is half-time?
  - 5 Ryan notices the time is 5:30. He realises he has been playing the guitar for 55 minutes. When did he start playing?
  - 6 Julie sees that the next bus is at 10:15. The time is 9:50. How long does she have to wait?

**C**

- 1 Davy hangs his washing on the line at 1:05. He takes it down at 2:55. How long has it been on the line?
  - 2 Kitty finishes delivering newspapers at 11:25. Her round has taken 70 minutes. When did she start?
  - 3 The ice show starts at 7:30. The first half lasts 80 minutes. When is the interval?
  - 4 A ferry crossing takes 105 minutes. The ferry docks at 3:55. When did it sail?
  - 5 Jack starts painting at 9:35. He finishes at 11:10. How long has he been painting?
- 
- 6 A film lasts 95 minutes. It starts at 2:50. When does it finish?